

CHUKA



UNIVERSITY

SUPPLEMENTARY / SPECIAL EXAMINATIONS

FOURTH YEAR EXAMINATION FOR THE AWARD OF BACHELOR DEGREE IN

CHEM 323: CHEMICAL KINETIC

STREAMS:

TIME: 2 HOURS

DAY/DATE: WEDNESDAY 18/11/2020

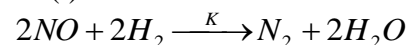
8.30 A.M - 10.30 A.M.

INSTRUCTIONS:

- Answer all questions

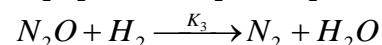
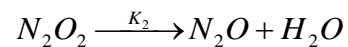
QUESTION ONE (30 MARKS)

1a (i). For the reaction



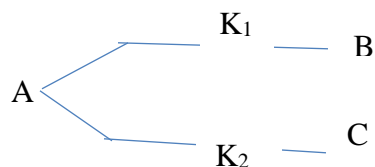
Following mechanism has been proposed:

$NO + NO \rightleftharpoons N_2O_2$; with K_1 as the rate of forward reaction and K_{-1} as the rate of the reverse reaction



On the basis of the above mechanism, derive the rate law of N_2 (12 marks)

(ii) Consider the parallel reaction



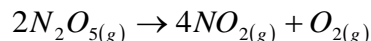
In an experiment, it was observed that 80% decomposition of A takes place in 40 minutes and analysis of product showed that 60% of B and 40% of C are present. Calculate K_1 and K_2 .

(6 marks)

(b) Write short notes on catalytic poisoning

(8 marks)

(c). Predict how the total pressure varies during the gas phase decomposition in a constant volume container (4 marks)



QUESTION TWO (20 MARKS)

2a(i). An actinometer uses a solution of $K_3[Fe(C_2O_4)_3]$ in which Fe^{3+} is reduced and the oxalate ion is oxidized. Assuming $\theta = 1.24$ at 310nm. Calculate the intensity of the incident light which produces 1.3×10^{-5} moles of Fe^{2+} in 36.5 min.

(9 marks)

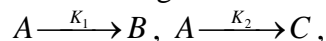
(ii). The same light source is used to irradiate a sample of CH_2CO for a period of 15.2 min. If the quantum yield of C_2H_2 is 1.0 and that of CO is 2.0, determine the amount of each gas produced by the photochemical reaction. ($h = 6.62608 \times 10^{-34}$ JS, $N_A = 6.02214 \times 10^{23}$ mol⁻¹, $C = 2.99792558 \times 10^8$ ms⁻¹, $1\text{nm} = 10^{-9}$ M)

(5 marks)

(b) An aqueous solution of a compound A of concentration 10^{-3} moles/litre absorbs 50% of incident radiation in a cell length 1cm and another compound B of concentration 2×10^{-3} moles/litre absorbs 60% of the incident radiation at a particular wavelength. Calculate the percentage absorbed in a solution containing 10^{-3} moles/litre of A and B in the same cell at the wavelength. (6 marks)

QUESTION THREE (20 MARKS)

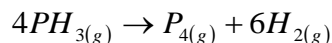
3a. A undergoes two simultaneous reactions to produce B and C according to



Show that E_a , the observed activation energy for the disappearance of A is given by the equation:

$$E_a = \frac{K_1 E_1 + K_2 E_2}{K_1 + K_2} \quad (7 \text{ marks})$$

(b). The decomposition of PH_3 at 950 K is observed and noting the change in total pressure as a function of time. The reaction is;



The following measurements were made on the system containing only PH_3 initially

Time (sec)	0	50	100
P (total) mmHg	200	299	332

Show that, it is a first order reaction and also calculate the rate constant (8 marks)

(c) Derive the Michaelis- Menten equation (5 marks)

.....